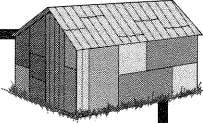
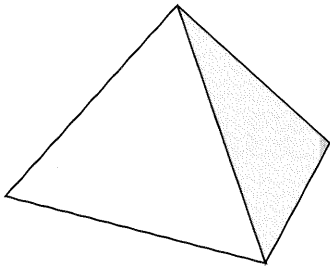


Additional Practice Problems for Activity 7

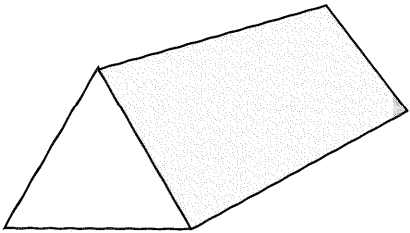


1. Draw a triangular prism. Explain why you think your drawing is a triangular prism.

2. Is the figure below a triangular prism? Explain why or why not:



3. Is the figure below a triangular prism? Explain why or why not:



4. Is it possible to draw a triangular prism that has six faces? Explain why or why not.

5. How many edges does a triangular prism have?

