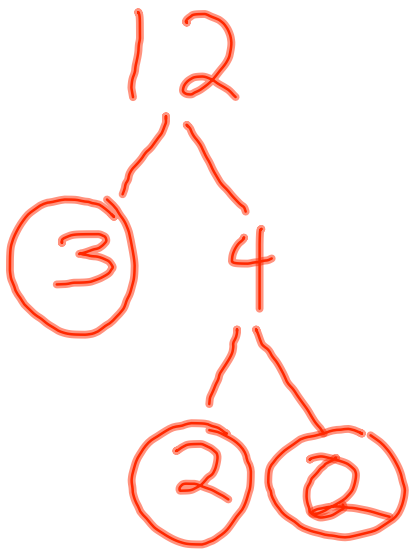
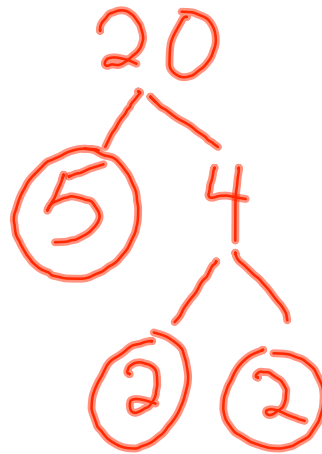


L C M

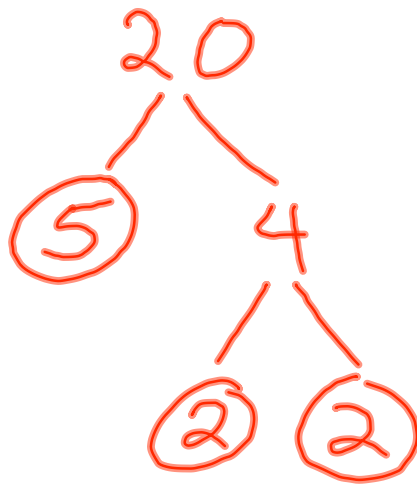


$$3 \cdot 2 \cdot 2$$



$$5 \cdot 2 \cdot 2$$

$$\underline{5 \cdot 2 \cdot 2 \cdot 3 = 60}$$



$$5 \cdot 2 \cdot 2$$



$$\underline{5 \cdot 5}$$

$$\underline{LCM = 5 \cdot 5 \cdot 2 \cdot 2 = 100}$$

