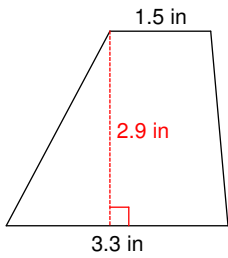


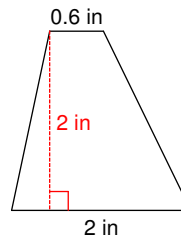
Area of Trapezoids

Find the area of each.

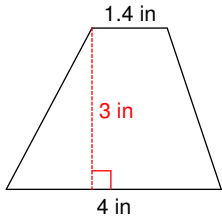
1)



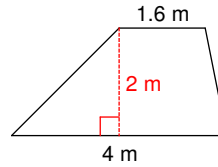
2)



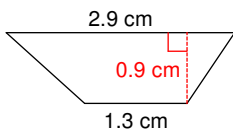
3)



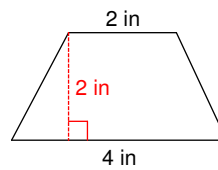
4)



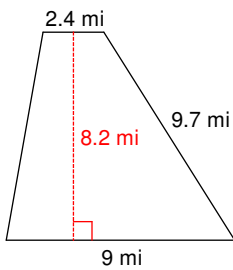
5)



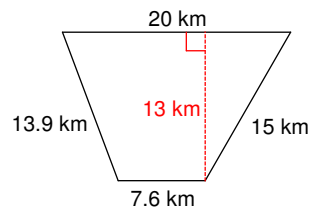
6)



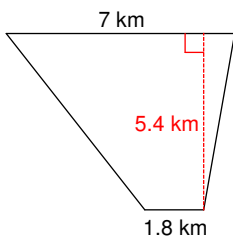
7)



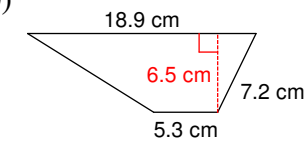
8)



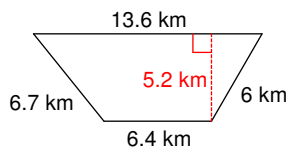
9)



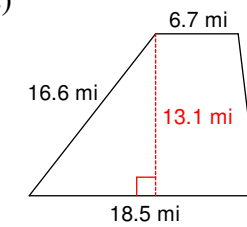
10)



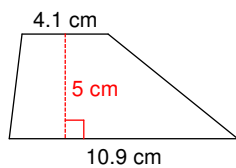
11)



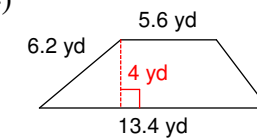
12)



13)



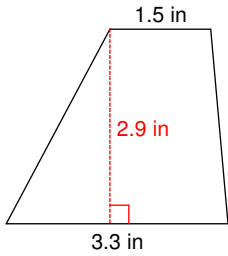
14)



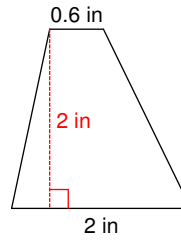
Area of Trapezoids

Find the area of each.

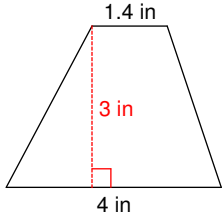
1) 6.96 in^2



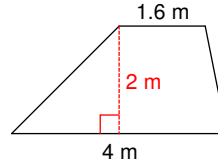
2) 2.6 in^2



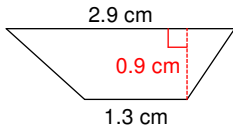
3) 8.1 in^2



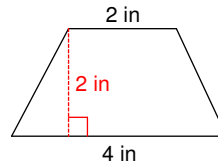
4) 5.6 m^2



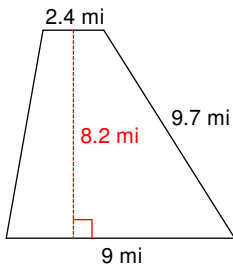
5) 1.89 cm^2



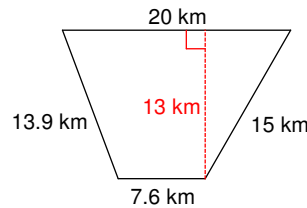
6) 6 in^2



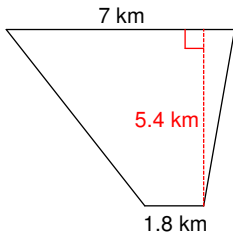
7) 46.74 mi^2



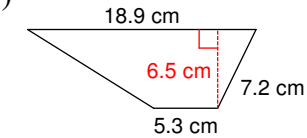
8) 179.4 km^2



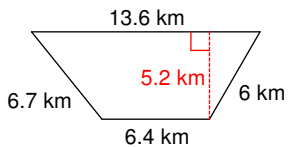
9) 23.76 km^2



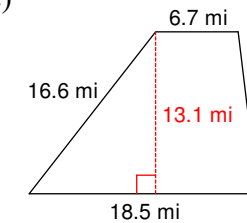
10) 78.65 cm^2



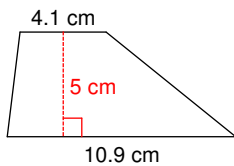
11) 52 km^2



12) 165.06 mi^2



13) 37.5 cm^2



14) 38 yd^2

